

# Measures

CE1

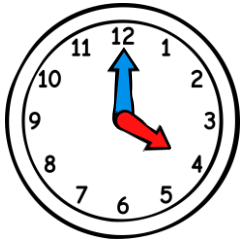
...../...../.....  
PRÉNOM : .....



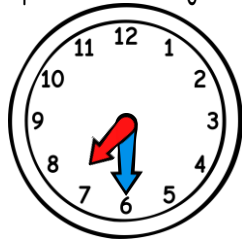
① Complète avec les mots « mois », « jours » ou « heures ».

1 année = 12 \_\_\_\_\_ | 1 mois = 28, 29, 30 ou 31 \_\_\_\_\_ | 1 jour = 24 \_\_\_\_\_

② Ecris l'heure sous chaque horloge.



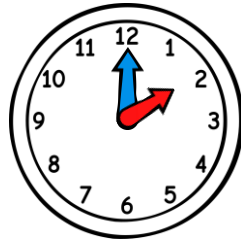
\_\_\_\_\_ h \_\_\_\_\_



\_\_\_\_\_ h \_\_\_\_\_



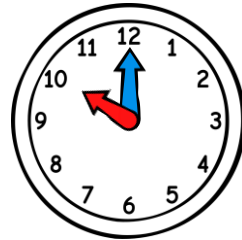
\_\_\_\_\_ h \_\_\_\_\_



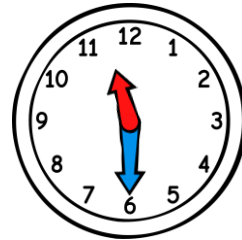
\_\_\_\_\_ h \_\_\_\_\_



\_\_\_\_\_ h \_\_\_\_\_



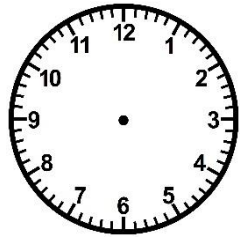
\_\_\_\_\_ h \_\_\_\_\_



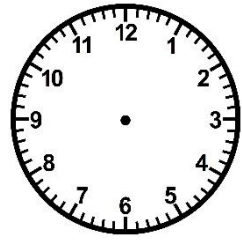
\_\_\_\_\_ h \_\_\_\_\_

③ Trace les aiguilles (rouge pour les heures, bleue pour les minutes).

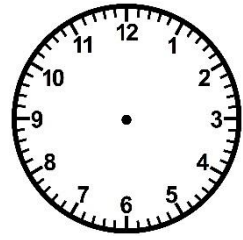
<https://laclassbleue.fr/>



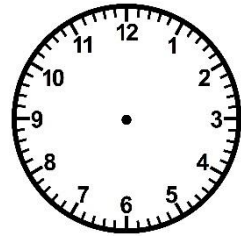
6 h 00



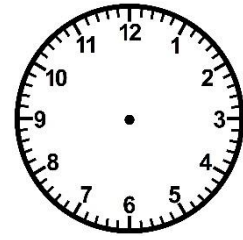
1 h 30



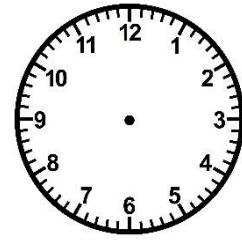
8 h 00



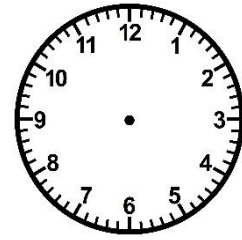
5 h 30



12 h 00



9 h 30



7 h 00

# Measures

CE1

...../...../.....  
PRÉNOM : .....



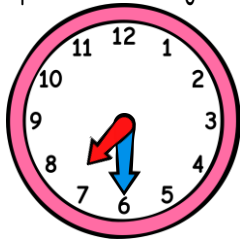
① Complète avec les mots « mois », « jours » ou « heures ».

1 année = 12 \_\_\_\_\_ | 1 mois = 28, 29, 30 ou 31 \_\_\_\_\_ | 1 jour = 24 \_\_\_\_\_

② Ecris l'heure sous chaque horloge.



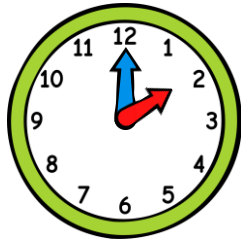
\_\_\_\_\_ h \_\_\_\_\_



\_\_\_\_\_ h \_\_\_\_\_



\_\_\_\_\_ h \_\_\_\_\_



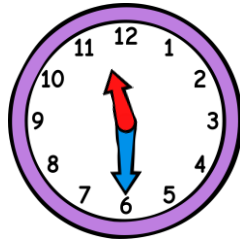
\_\_\_\_\_ h \_\_\_\_\_



\_\_\_\_\_ h \_\_\_\_\_



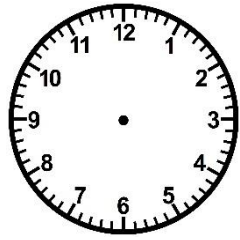
\_\_\_\_\_ h \_\_\_\_\_



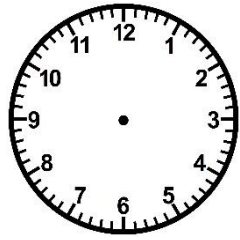
\_\_\_\_\_ h \_\_\_\_\_

③ Trace les aiguilles (rouge pour les heures, bleue pour les minutes).

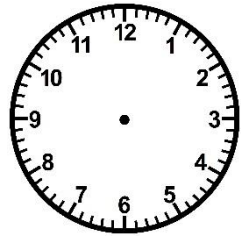
<https://laclassbleue.fr/>



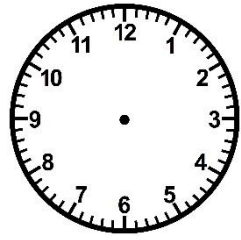
6 h 00



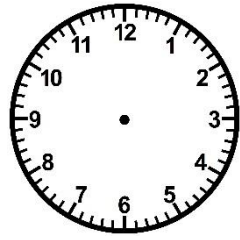
1 h 30



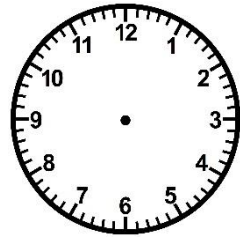
8 h 00



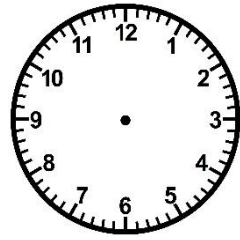
5 h 30



12 h 00



9 h 30



7 h 00

# Measures

CE1

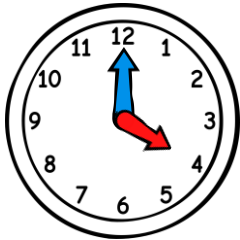
...../...../.....  
PRÉNOM : .....



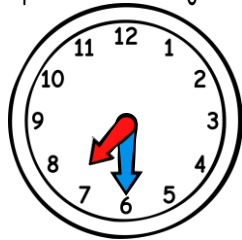
① Complète avec les mots « mois », « jours » ou « heures ».

1 année = 12 \_\_\_\_\_ | 1 mois = 28, 29, 30 ou 31 \_\_\_\_\_ | 1 jour = 24 \_\_\_\_\_

② Ecris l'heure sous chaque horloge.



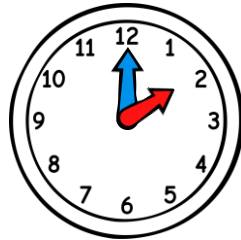
h h



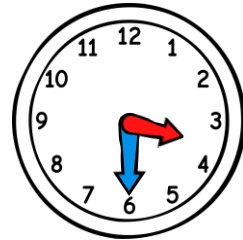
h h



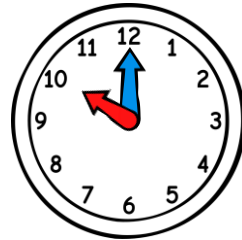
h h



h h



h h



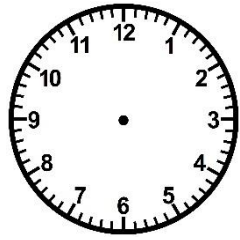
h h



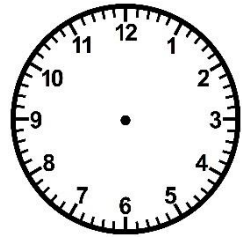
h h

③ Trace les aiguilles (rouge pour les heures, bleue pour les minutes).

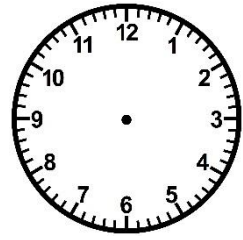
<https://laclassbleue.fr/>



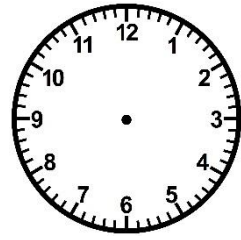
6 h 00



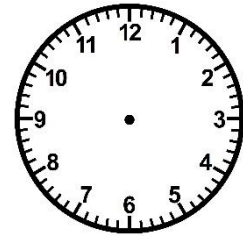
1 h 30



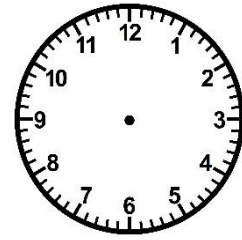
8 h 00



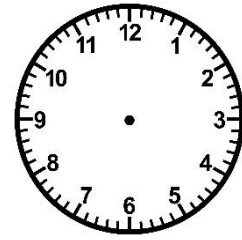
5 h 30



12 h 00



9 h 30



7 h 00

# Measures

CE1

...../...../.....  
PRÉNOM : .....



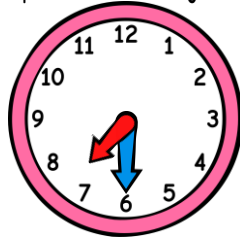
① Complète avec les mots « mois », « jours » ou « heures ».

1 année = 12 \_\_\_\_\_ | 1 mois = 28, 29, 30 ou 31 \_\_\_\_\_ | 1 jour = 24 \_\_\_\_\_

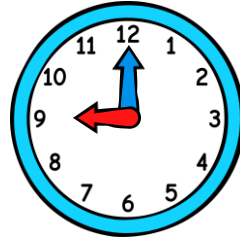
② Ecris l'heure sous chaque horloge.



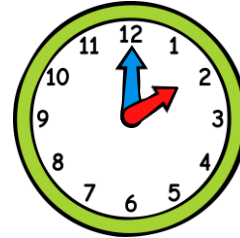
h h



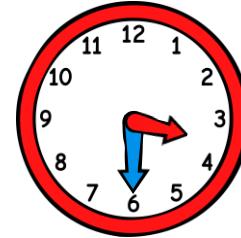
h h



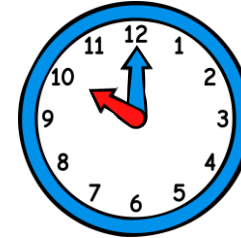
h h



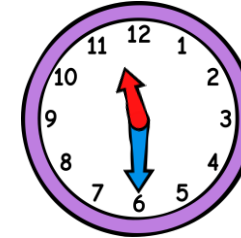
h h



h h



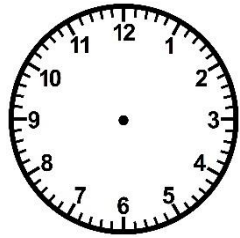
h h



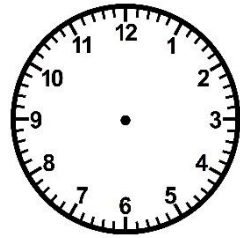
h h

③ Trace les aiguilles (rouge pour les heures, bleue pour les minutes).

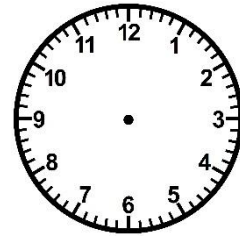
<https://laclassbleue.fr/>



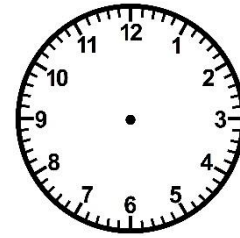
6 h 00



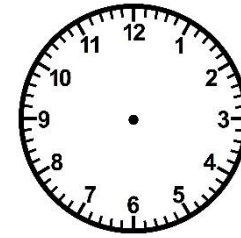
1 h 30



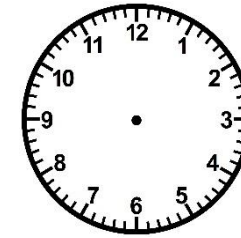
8 h 00




5 h 30



12 h 00



9 h 30



7 h 00

# Measures

CE1

...../...../.....  
PRÉNOM : .....



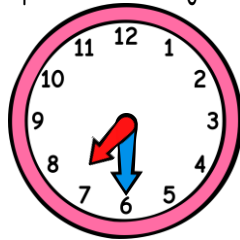
① Complète avec les mots « mois », « jours » ou « heures ».

1 année = 12 mois | 1 mois = 28, 29, 30 ou 31 jours | 1 jour = 24 heures

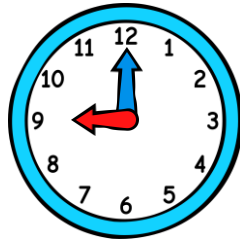
② Ecris l'heure sous chaque horloge.



4h00 16h00



7h30 19h30



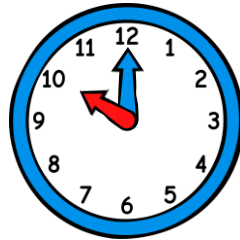
9h00 21h00



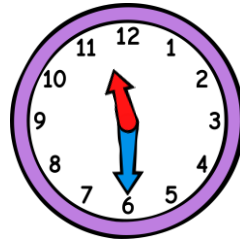
2h00 14h00



3h30 15h30



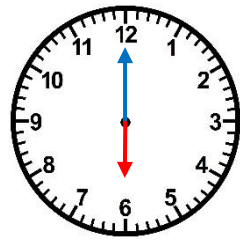
10h00 22h00



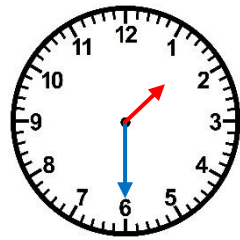
11h30 23h30

③ Trace les aiguilles (rouge pour les heures, bleue pour les minutes).

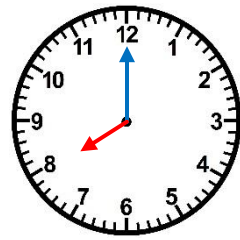
<https://laclassbleue.fr/>



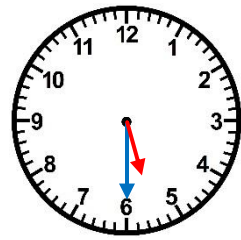
6 h 00



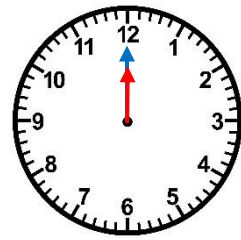
1 h 30



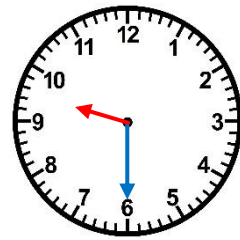
8 h 00



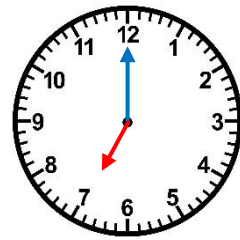
5 h 30



12 h 00



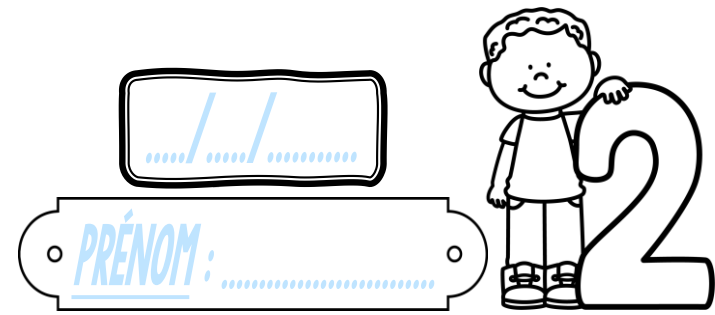
9 h 30



7 h 00

# Measures

CE1



① Réponds à cette devinette.

Le cours de boxe de Lilou a commencé à 17h30. Il dure 60 min. À quelle heure se finira-t-il ?

② Écris l'heure sous chaque horloge.

\_\_\_\_\_ h \_\_\_\_\_

\_\_\_\_\_ h \_\_\_\_\_

\_\_\_\_\_ h \_\_\_\_\_

\_\_\_\_\_ h \_\_\_\_\_

\_\_\_\_\_ h \_\_\_\_\_

\_\_\_\_\_ h \_\_\_\_\_

\_\_\_\_\_ h \_\_\_\_\_

③ Trace les aiguilles (rouge pour les heures, bleue pour les minutes).

<https://laclassbleue.fr/>

5 h 00

7 h 30

14 h 00

9 h 00

23 h 30

19 h 00

12 h 30

# Measures

CE1

...../...../.....  
PRÉNOM : .....



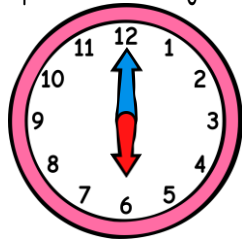
① Réponds à cette devinette.

Le cours de boxe de Lilou a commencé à 17h30. Il dure 60 min. À quelle heure se finira-t-il ?

② Ecris l'heure sous chaque horloge.



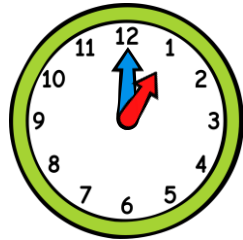
\_\_\_ h \_\_\_



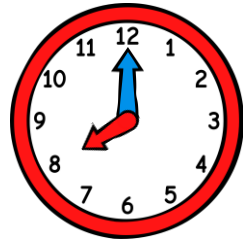
\_\_\_ h \_\_\_



\_\_\_ h \_\_\_



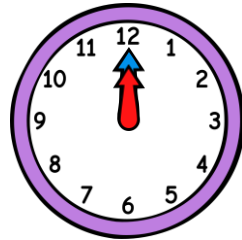
\_\_\_ h \_\_\_



\_\_\_ h \_\_\_



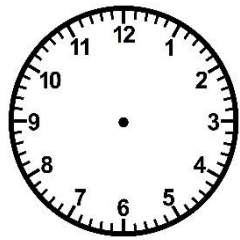
\_\_\_ h \_\_\_



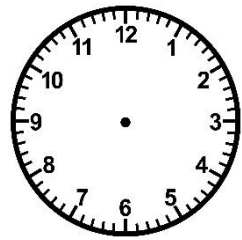
\_\_\_ h \_\_\_

③ Trace les aiguilles (rouge pour les heures, bleue pour les minutes).

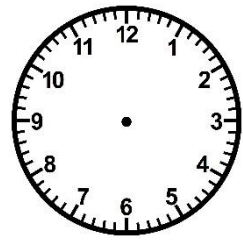
<https://laclassbleue.fr/>



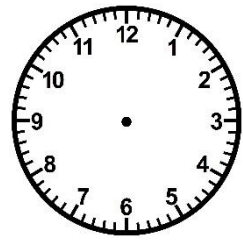
5 h 00



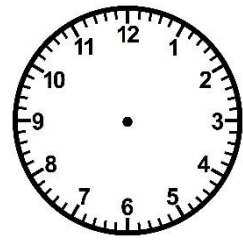
7 h 30



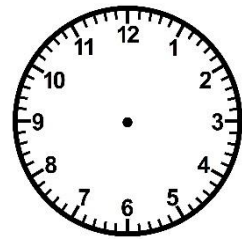
14 h 00



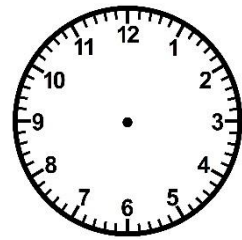
9 h 00



23 h 30



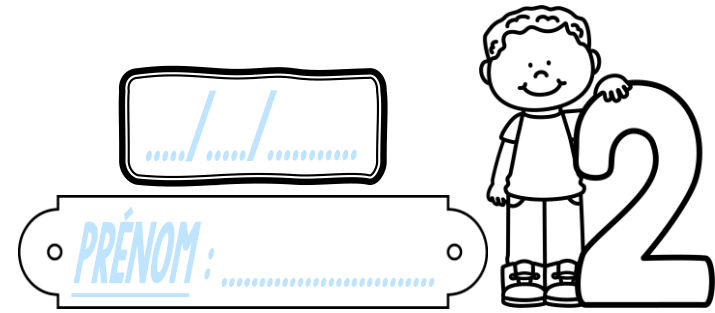
19 h 00



12 h 30

# Measures

CE1



① Réponds à cette devinette.

Le cours de boxe de Lilou a commencé à 17h30. Il dure 60 min. À quelle heure se finira-t-il ?

② Écris l'heure sous chaque horloge.

h	h	h	h	h	h	h	h
---	---	---	---	---	---	---	---

③ Trace les aiguilles (rouge pour les heures, bleue pour les minutes).

<https://laclassbleue.fr/>

5 h 00	7 h 30	14 h 00	9 h 00	23 h 30	19 h 00	12 h 30
--------	--------	---------	--------	---------	---------	---------



# Measures

CE1

...../...../.....  
PRÉNOM : .....



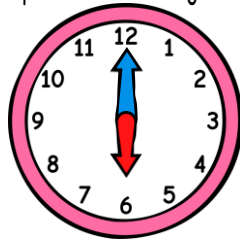
① Réponds à cette devinette.

Le cours de boxe de Lilou a commencé à 17h30. Il dure 60 min. À quelle heure se finira-t-il ?

② Ecris l'heure sous chaque horloge.



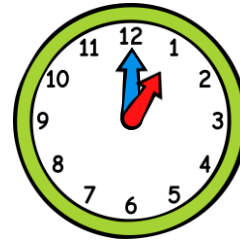
h h



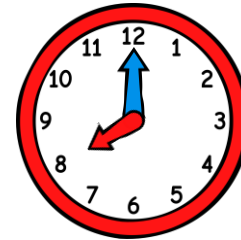
h h



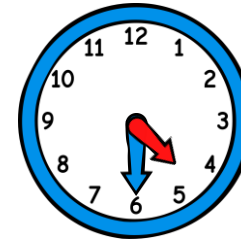
h h



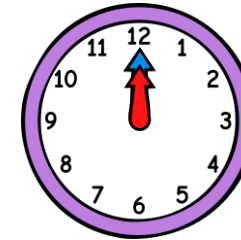
h h



h h



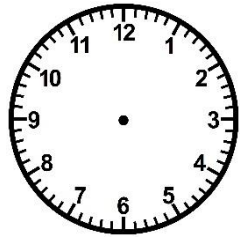
h h



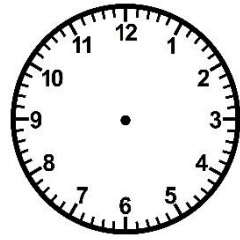
h h

③ Trace les aiguilles (rouge pour les heures, bleue pour les minutes).

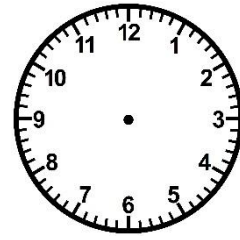
<https://laclassbleue.fr/>




5 h 00



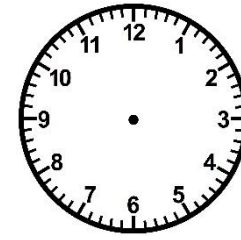
7 h 30




14 h 00



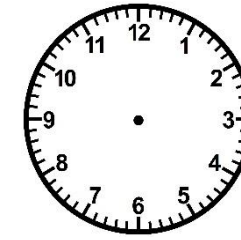
9 h 00



23 h 30



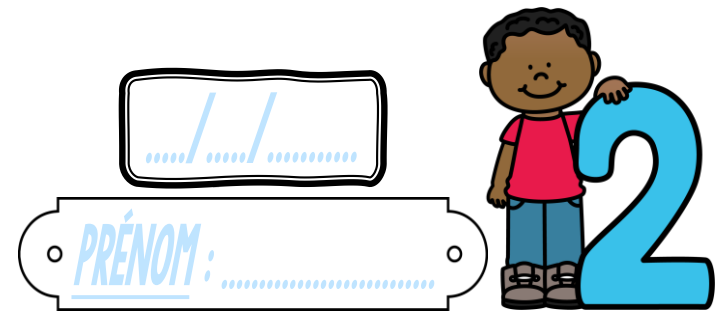
19 h 00



12 h 30

# Measures

CE1



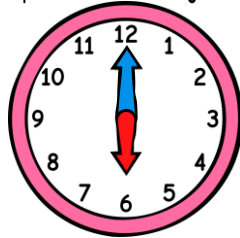
① Réponds à cette devinette.

Le cours de boxe de Lilou a commencé à 17h30. Il dure 60 min. À quelle heure se finira-t-il ?

② Écris l'heure sous chaque horloge.



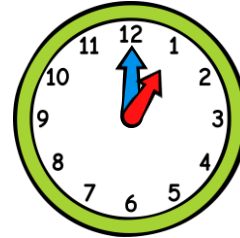
2h30 14h30



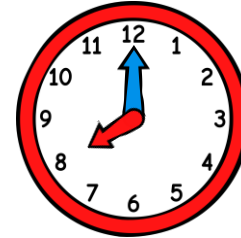
6h00 18h00



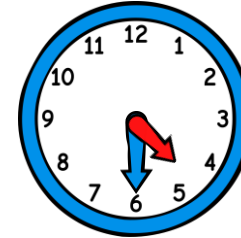
10h30 22h30



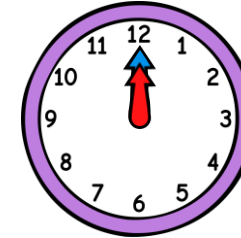
1h00 13h00



8h00 20h00



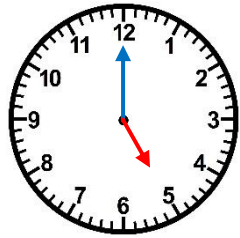
4h30 16h30



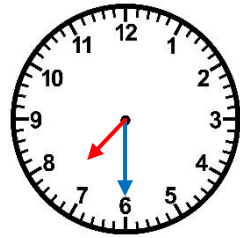
0h00 12h00

③ Trace les aiguilles (rouge pour les heures, bleue pour les minutes).

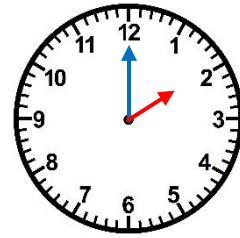
<https://laclassbleue.fr/>



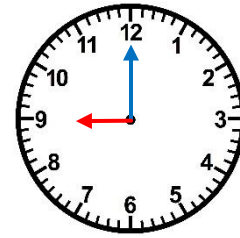
5 h 00



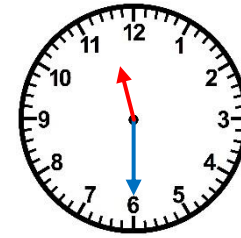
7 h 30



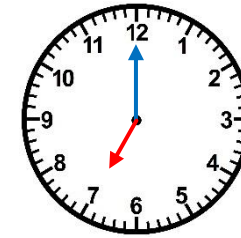
14 h 00



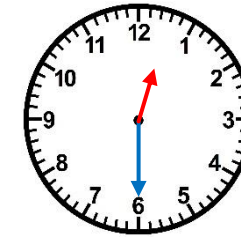
9 h 00



23 h 30



19 h 00




12 h 30

# Measures

CE1

...../...../.....

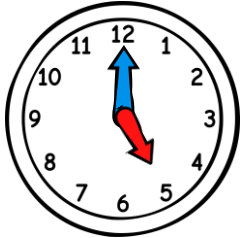
PRÉNOM : .....



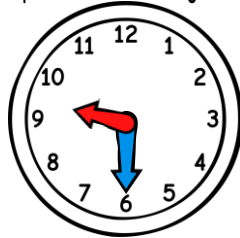
① Colorie la bonne unité de durée.

la récréation ⇒ jours heures minutes | une nuite de sommeil ⇒ jours heures minutes

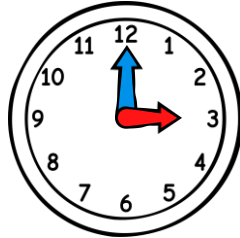
② Ecris l'heure sous chaque horloge.



\_\_\_ h \_\_\_




\_\_\_ h \_\_\_



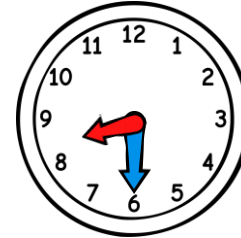
\_\_\_ h \_\_\_



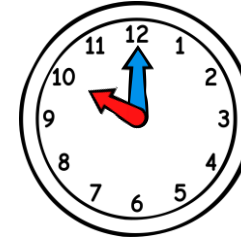
\_\_\_ h \_\_\_



\_\_\_ h \_\_\_



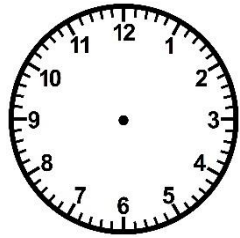
\_\_\_ h \_\_\_



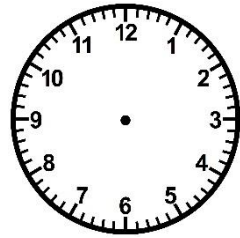
\_\_\_ h \_\_\_

③ Trace les aiguilles (rouge pour les heures, bleue pour les minutes).

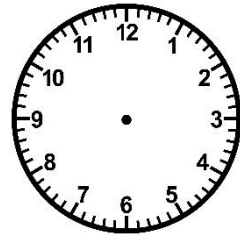
<https://laclassbleue.fr/>



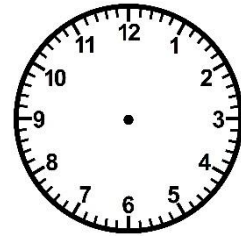
2 h 30



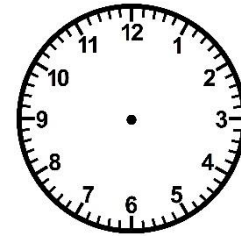
8 h 00



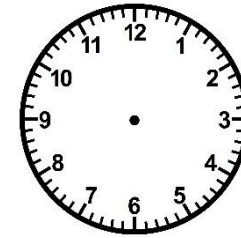
13 h 00



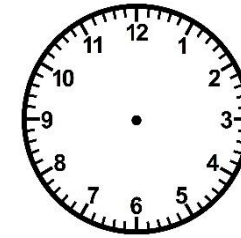
22 h 30



6 h 00



17 h 30



11 h 30

# Measures

CE1

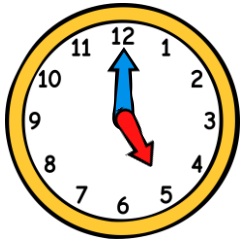
...../...../.....  
PRÉNOM : .....



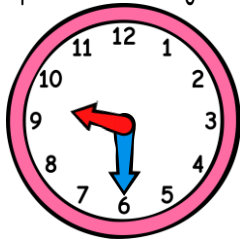
① Colorie la bonne unité de durée.

la récréation ⇒ jours heures minutes | une nuite de sommeil ⇒ jours heures minutes

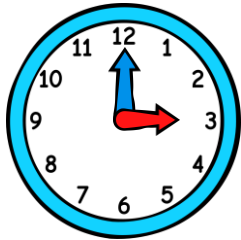
② Ecris l'heure sous chaque horloge.



\_\_\_ h \_\_\_



\_\_\_ h \_\_\_



\_\_\_ h \_\_\_



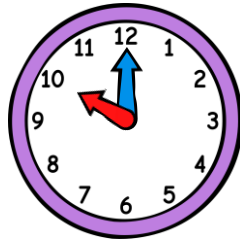
\_\_\_ h \_\_\_



\_\_\_ h \_\_\_



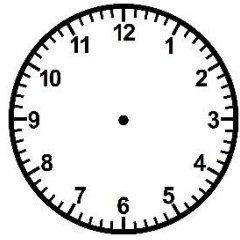
\_\_\_ h \_\_\_



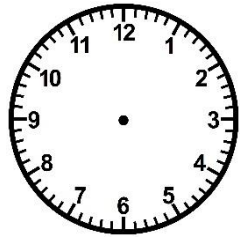
\_\_\_ h \_\_\_

③ Trace les aiguilles (rouge pour les heures, bleue pour les minutes).

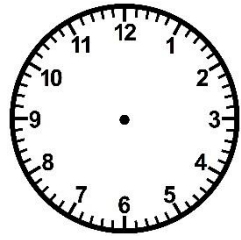
<https://laclassbleue.fr/>



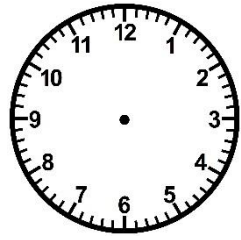
2 h 30



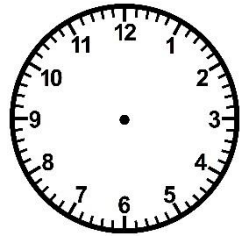
8 h 00



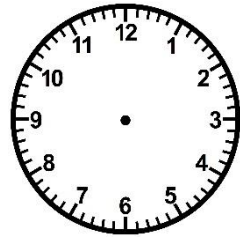
13 h 00



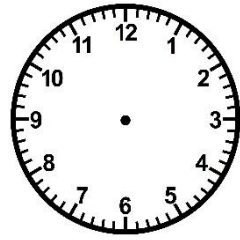
22 h 30



6 h 00



17 h 30




11 h 30

# Measures

CE1

...../...../.....



PRÉNOM : .....



① Colorie la bonne unité de durée.

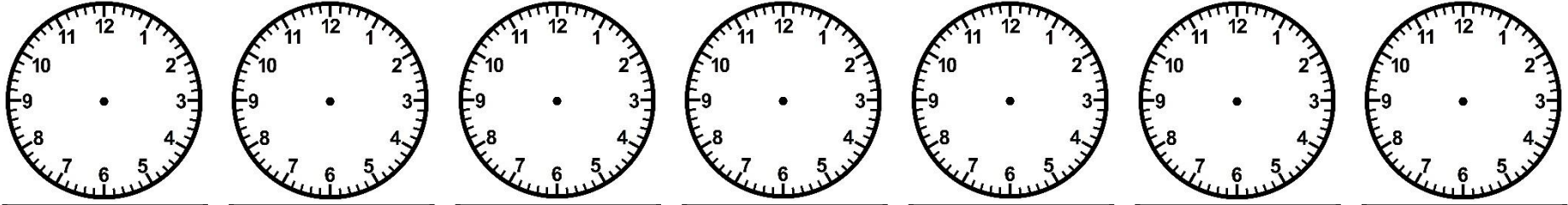

la récréation ⇒ **jours** **heures** **minutes** | une nuite de sommeil ⇒ **jours** **heures** **minutes**

② Écris l'heure sous chaque horloge.



h	h	h	h	h	h	h	h
---	---	---	---	---	---	---	---

③ Trace les aiguilles (rouge pour les heures, bleue pour les minutes).




2 h 30	8 h 00	13 h 00	22 h 30	6 h 00	17 h 30	11 h 30
--------	--------	---------	---------	--------	---------	---------

<https://laclassbleue.fr/>

# Measures

CE1

...../...../.....  
PRÉNOM : .....

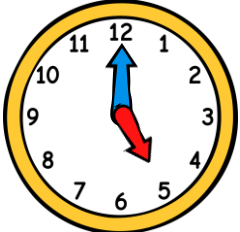
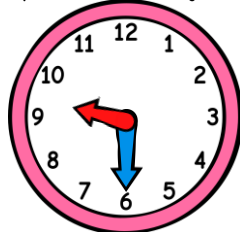
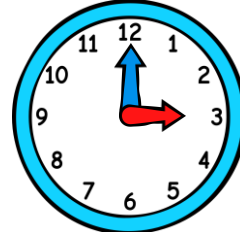
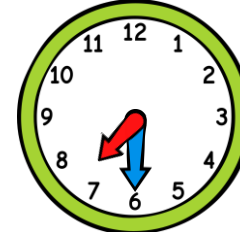
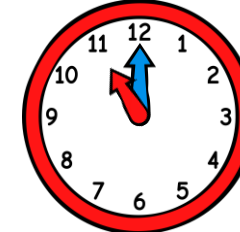
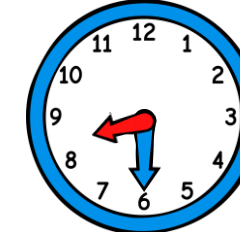
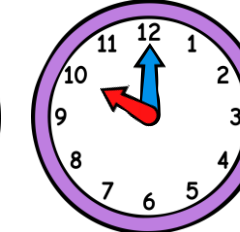


① Colorie la bonne unité de durée.

la récréation ⇒ jours heures minutes | une nuit de sommeil ⇒ jours heures minutes

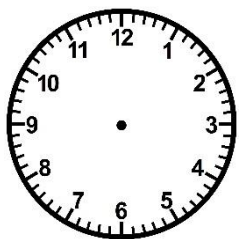
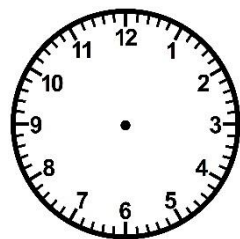
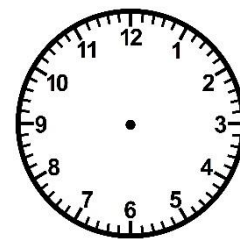
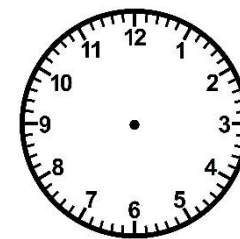
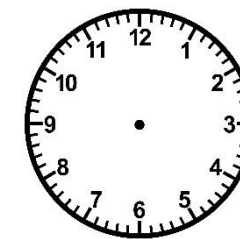

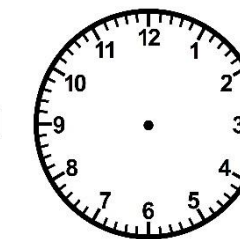
② Écris l'heure sous chaque horloge.



						
<span>h</span> <span>h</span>	<span>h</span> <span>h</span>	<span>h</span> <span>h</span>	<span>h</span> <span>h</span>	<span>h</span> <span>h</span>	<span>h</span> <span>h</span>	<span>h</span> <span>h</span>

③ Trace les aiguilles (rouge pour les heures, bleue pour les minutes).



						
<u>2 h 30</u>	<u>8 h 00</u>	<u>13 h 00</u>	<u>22 h 30</u>	<u>6 h 00</u>	<u>17 h 30</u>	<u>11 h 30</u>

<https://laclassbleue.fr/>

# Meurea

CE1

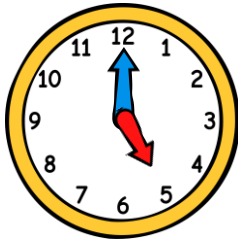
...../...../.....  
PRÉNOM : .....



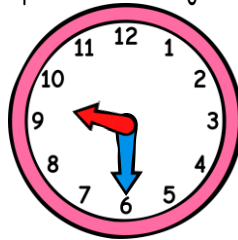
① Colorie la bonne unité de durée.

la récréation ⇒ jours heures minutes | une nuit de sommeil ⇒ jours heures minutes

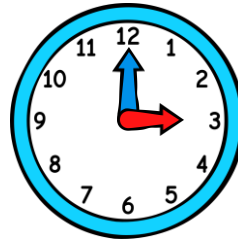
② Écris l'heure sous chaque horloge.



5h00 17h00



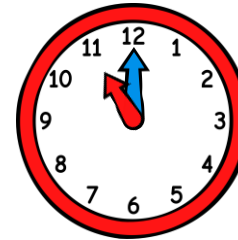
9h30 21h30



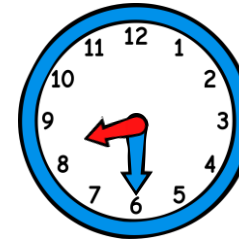
3h00 15h00



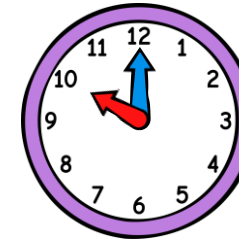
7h30 19h30



11h00 23h00



8h30 20h30

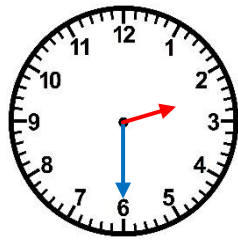


10h00 22h00

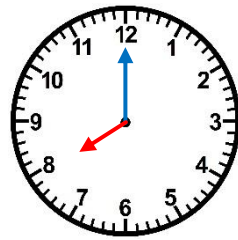


③ Trace les aiguilles (rouge pour les heures, bleue pour les minutes).

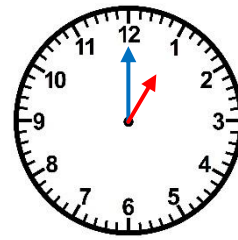
<https://laclassbleue.fr/>



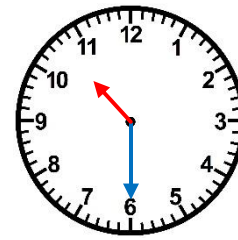
2 h 30



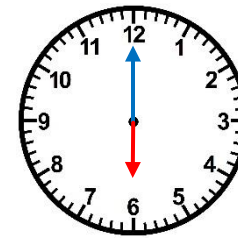
8 h 00



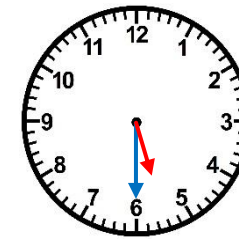
13 h 00



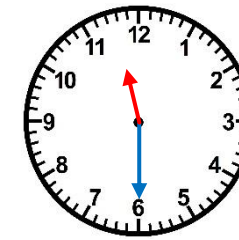
22 h 30



6 h 00



17 h 30



11 h 30




# Measures

CE1

..... / ..... / .....

PRÉNOM : .....



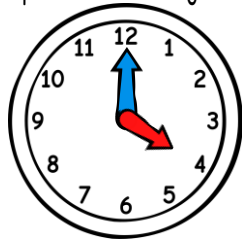
① Complète avec les mots « jours », « heures » ou « minutes ».

se brosser les dents ⇒ 3 \_\_\_\_\_ | un week-end ⇒ 2 \_\_\_\_\_ | un film au cinéma ⇒ 2 \_\_\_\_\_

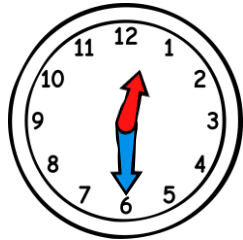
② Ecris l'heure sous chaque horloge.



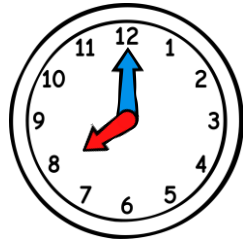
\_\_\_\_\_ h \_\_\_\_\_



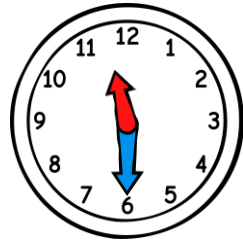
\_\_\_\_\_ h \_\_\_\_\_



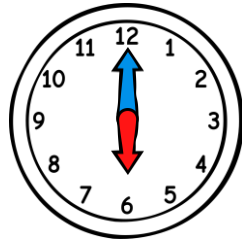
\_\_\_\_\_ h \_\_\_\_\_



\_\_\_\_\_ h \_\_\_\_\_



\_\_\_\_\_ h \_\_\_\_\_



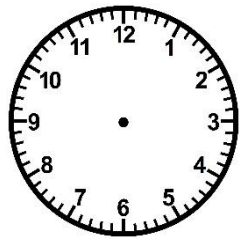
\_\_\_\_\_ h \_\_\_\_\_



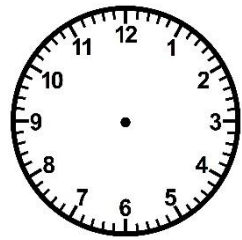
\_\_\_\_\_ h \_\_\_\_\_

<https://laclassbleue.fr/>

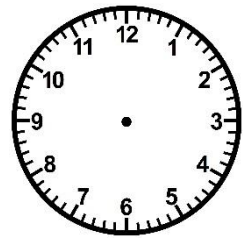
③ Trace les aiguilles (rouge pour les heures, bleue pour les minutes).



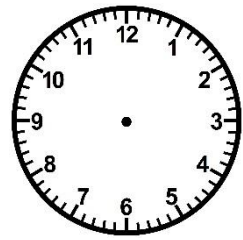
15 h 00



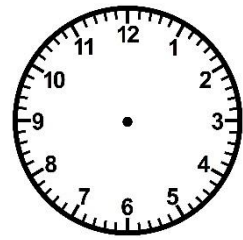
9 h 30



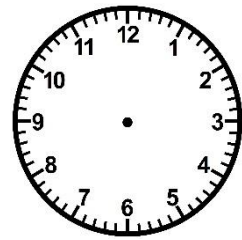
22 h 00



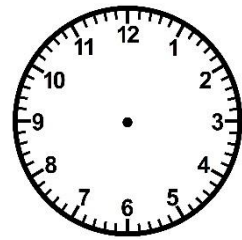
7 h 00



16 h 30



20 h 30



13 h 00




# Measures

CE1

..... / ..... / .....

PRÉNOM : .....



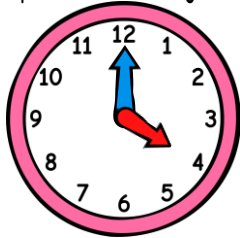
① Complète avec les mots « jours », « heures » ou « minutes ».

se brosser les dents ⇒ 3 \_\_\_\_\_ | un week-end ⇒ 2 \_\_\_\_\_ | un film au cinéma ⇒ 2 \_\_\_\_\_

② Ecris l'heure sous chaque horloge.



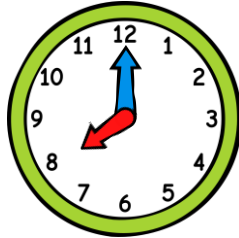
\_\_\_\_\_ h \_\_\_\_\_



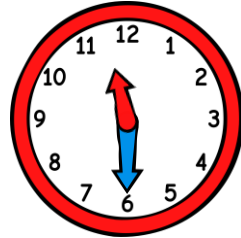
\_\_\_\_\_ h \_\_\_\_\_



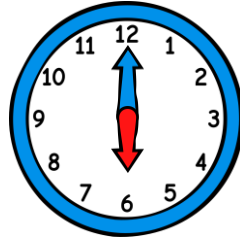
\_\_\_\_\_ h \_\_\_\_\_



\_\_\_\_\_ h \_\_\_\_\_



\_\_\_\_\_ h \_\_\_\_\_



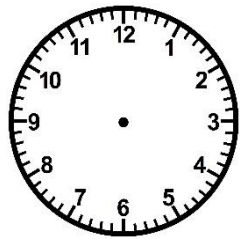
\_\_\_\_\_ h \_\_\_\_\_



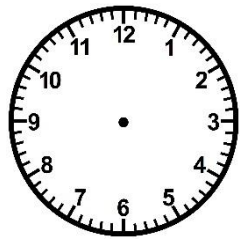
\_\_\_\_\_ h \_\_\_\_\_

<https://laclassebleue.fr/>

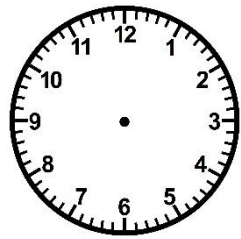
③ Trace les aiguilles (rouge pour les heures, bleue pour les minutes).



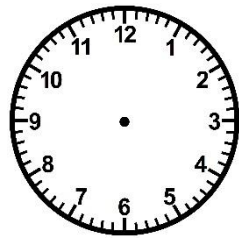
15 h 00



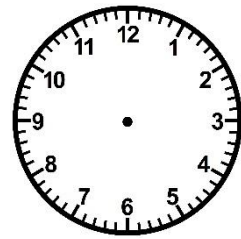
9 h 30



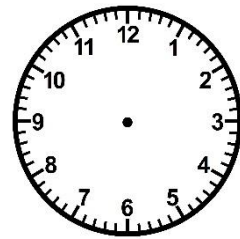
22 h 00



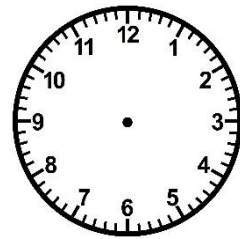
7 h 00



16 h 30



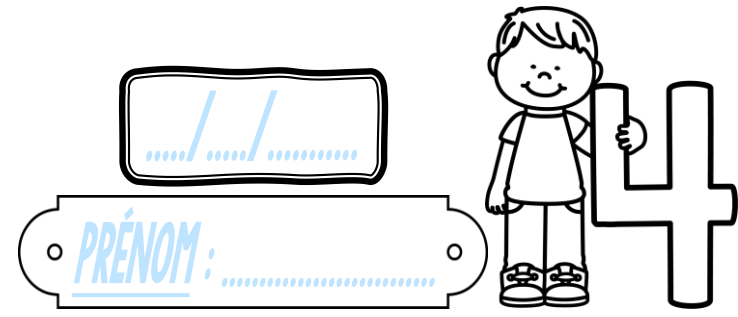
20 h 30



13 h 00

# Measures

CE1



① Complète avec les mots « jours », « heures » ou « minutes ».  
 se brosser les dents ⇒ 3 \_\_\_\_\_ | un week-end ⇒ 2 \_\_\_\_\_ | un film au cinéma ⇒ 2 \_\_\_\_\_

② Ecris l'heure sous chaque horloge.

h	h	h	h	h	h	h	h
---	---	---	---	---	---	---	---

③ Trace les aiguilles (rouge pour les heures, bleue pour les minutes).

15 h 00	9 h 30	22 h 00	7 h 00	16 h 30	20 h 30	13 h 00
---------	--------	---------	--------	---------	---------	---------


<https://laclassibleue.fr/>

# Meurea

CE1

..... / ..... / .....

PRÉNOM : .....



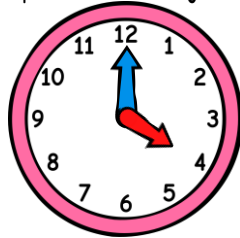
① Complète avec les mots « jours », « heures » ou « minutes ».

se brosser les dents ⇒ 3 \_\_\_\_\_ | un week-end ⇒ 2 \_\_\_\_\_ | un film au cinéma ⇒ 2 \_\_\_\_\_

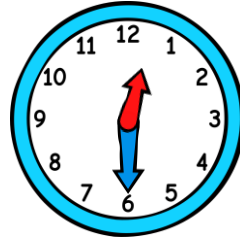
② Ecris l'heure sous chaque horloge.



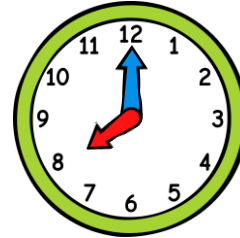
h h



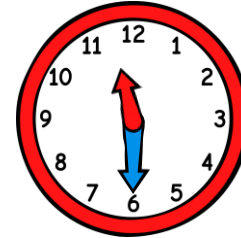
h h



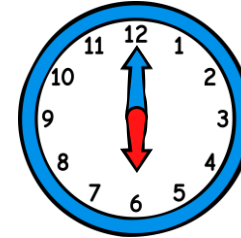
h h



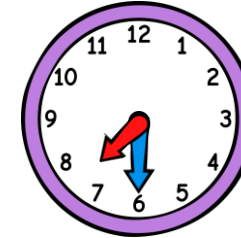
h h



h h



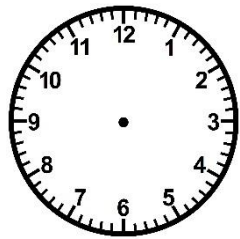
h h



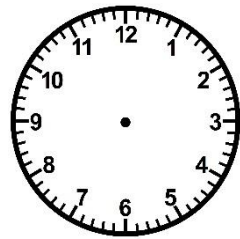
h h

<https://laclassebleue.fr/>

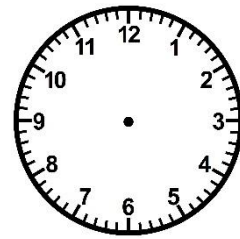
③ Trace les aiguilles (rouge pour les heures, bleue pour les minutes).



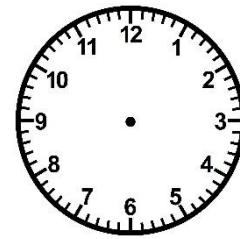
15 h 00



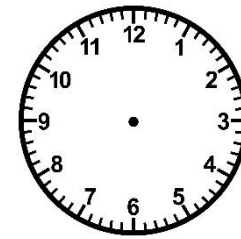
9 h 30



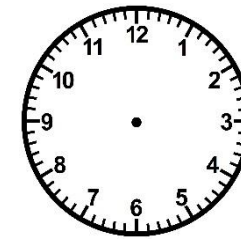
22 h 00




7 h 00



16 h 30



20 h 30



13 h 00


Meurea/Lire l'heure

# Measures

CE1

..... / ..... / .....

PRÉNOM : .....

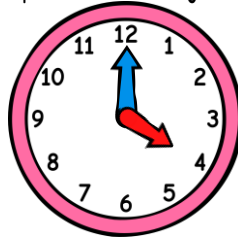


① Complète avec les mots « jours », « heures » ou « minutes ».  
se brosser les dents ⇒ 3 minutes | un week-end ⇒ 2 jours | un film au cinéma ⇒ 2 heures

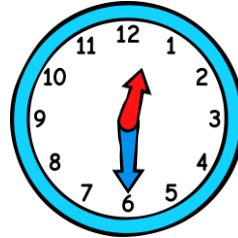
② Ecris l'heure sous chaque horloge.



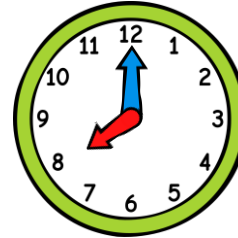
1h30 13h30



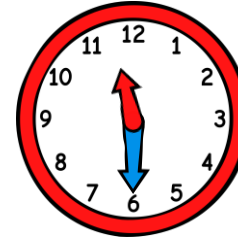
4h00 16h00



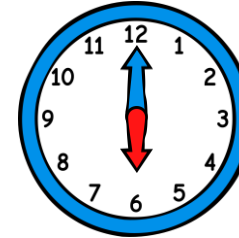
0h30 12h30



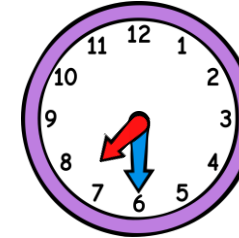
8h00 20h00



11h30 23h30



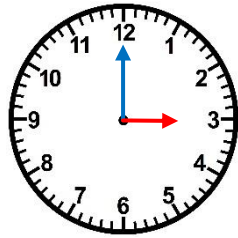
6h00 18h00



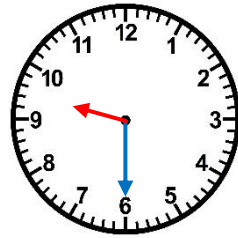
7h30 19h30

<https://laclassbleue.fr/>

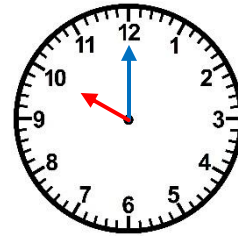
③ Trace les aiguilles (rouge pour les heures, bleue pour les minutes).



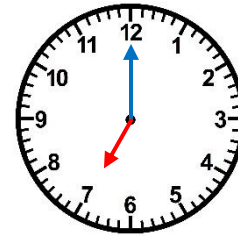
15 h 00



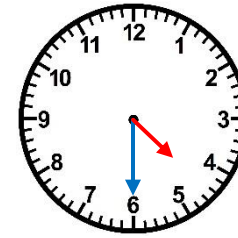
9 h 30



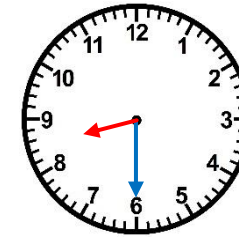
22 h 00



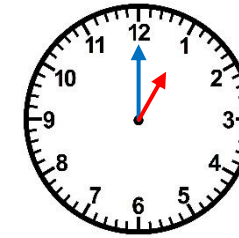
7 h 00



16 h 30




20 h 30



13 h 00

# Measures

CE1



① Colorie la bonne unité de durée.

prendre une douche ⇒ **jours** **heures** **minutes** | des vacances à la mer ⇒ **jours** **heures** **minutes**

② Ecris l'heure sous chaque horloge.

\_\_\_\_\_ h \_\_\_\_\_

\_\_\_\_\_ h \_\_\_\_\_

\_\_\_\_\_ h \_\_\_\_\_

\_\_\_\_\_ h \_\_\_\_\_

\_\_\_\_\_ h \_\_\_\_\_

\_\_\_\_\_ h \_\_\_\_\_

\_\_\_\_\_ h \_\_\_\_\_

③ Trace les aiguilles (rouge pour les heures, bleue pour les minutes).

<https://laclassobleue.fr/>

6 h 00

1 h 30

8 h 00

5 h 30

12 h 00

9 h 30

7 h 00

# Measures

CE1

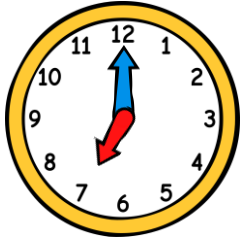
...../...../.....  
PRÉNOM : .....



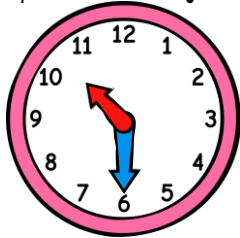
① Colorie la bonne unité de durée.

prendre une douche ⇒ jours heures minutes | des vacances à la mer ⇒ jours heures minutes

② Ecris l'heure sous chaque horloge.



\_\_\_ h \_\_\_



\_\_\_ h \_\_\_



\_\_\_ h \_\_\_



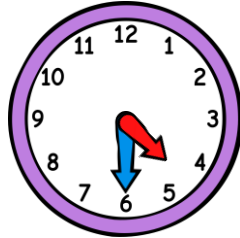
\_\_\_ h \_\_\_



\_\_\_ h \_\_\_



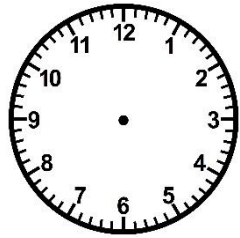
\_\_\_ h \_\_\_



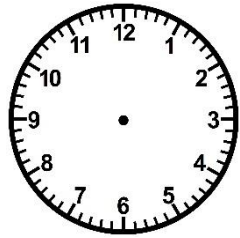
\_\_\_ h \_\_\_

③ Trace les aiguilles (rouge pour les heures, bleue pour les minutes).

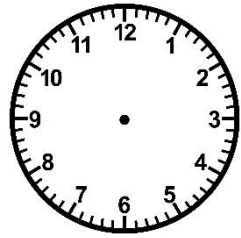
<https://laclassobleue.fr/>



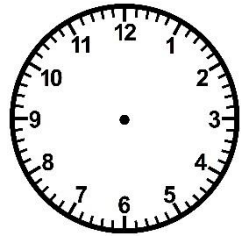
6 h 00



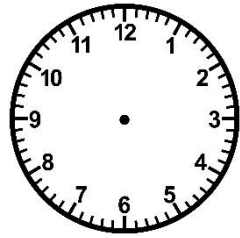
1 h 30



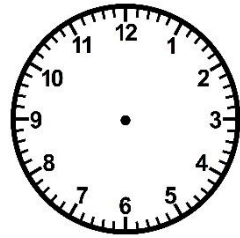
8 h 00



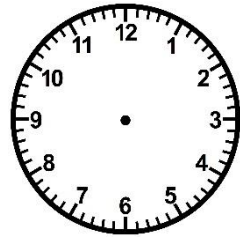
5 h 30



12 h 00



9 h 30



7 h 00

# Measures

CE1

...../...../.....  
PRÉNOM : .....



① Colorie la bonne unité de durée.

prendre une douche ⇒ jours heures minutes | des vacances à la mer ⇒ jours heures minutes

② Ecris l'heure sous chaque horloge.

h h    h h    h h    h h    h h    h h    h h

③ Trace les aiguilles (rouge pour les heures, bleue pour les minutes).

6 h 00    1 h 30    8 h 00    5 h 30    12 h 00    9 h 30    7 h 00

<https://laclassobleue.fr/>



# Measures

CE1

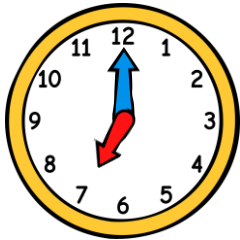
...../...../.....  
PRÉNOM : .....



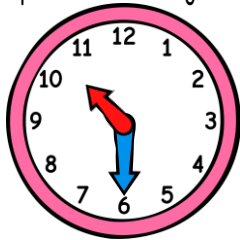
① Colorie la bonne unité de durée.

prendre une douche ⇒ jours heures minutes | des vacances à la mer ⇒ jours heures minutes

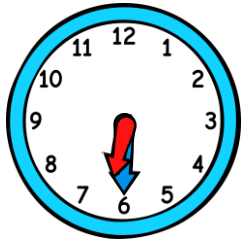
② Ecris l'heure sous chaque horloge.



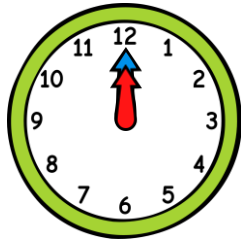
h h



h h



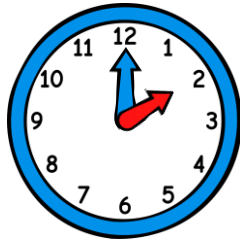
h h



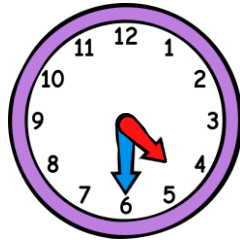
h h



h h



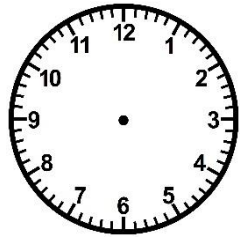
h h



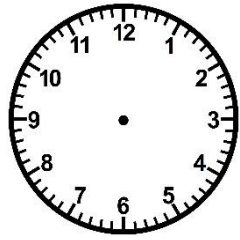
h h

③ Trace les aiguilles (rouge pour les heures, bleue pour les minutes).

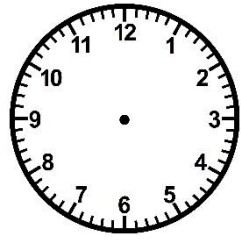
<https://laclassobleue.fr/>



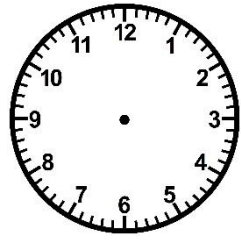
6 h 00



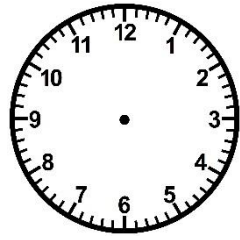
1 h 30



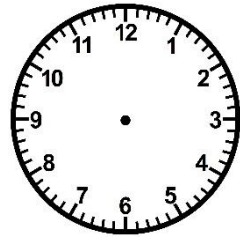
8 h 00



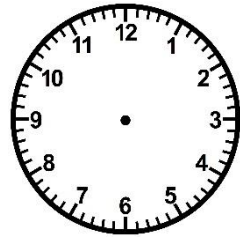
5 h 30



12 h 00



9 h 30



7 h 00




# Measures

CE1

...../...../.....


PRÉNOM : .....

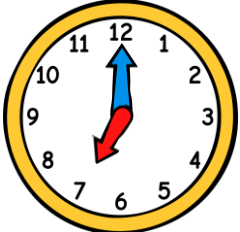
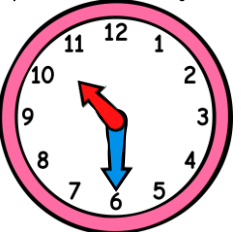
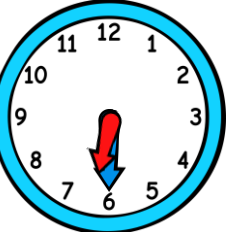
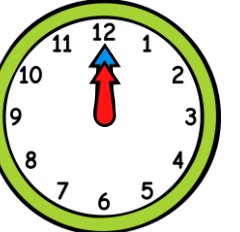

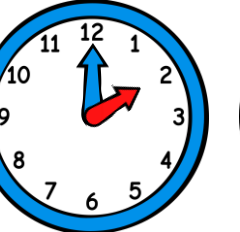
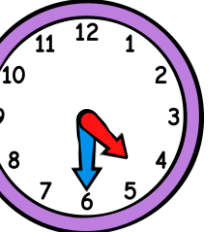


① Colorie la bonne unité de durée.


prendre une douche ⇒ jours heures minutes | des vacances à la mer ⇒ jours heures minutes

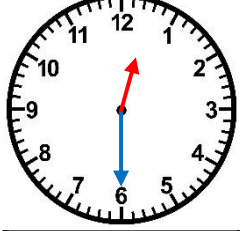
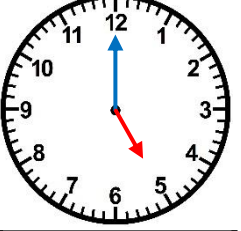
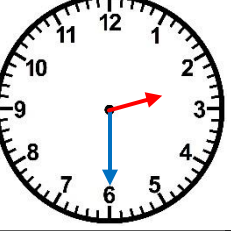
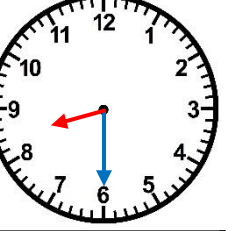
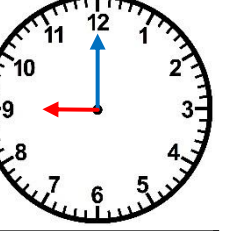
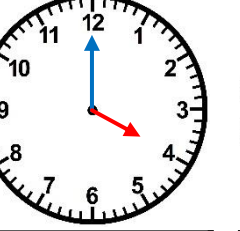
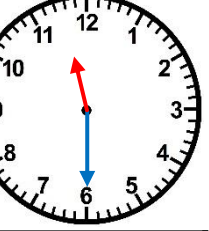
② Ecris l'heure sous chaque horloge.



						
7h00 19h00	10h30 22h30	6h30 18h30	0h00 12h00	9h30 21h30	2h00 14h00	4h30 16h30

③ Trace les aiguilles (rouge pour les heures, bleue pour les minutes).



						
12 h 30	5 h 00	2 h 30	8 h 30	21 h 00	16 h 00	23 h 30

<https://laclassobleue.fr/>